

Q:1

Topic Name:Mathematics-Section A

ItemCode:181

Let  $f : \mathbb{R} \rightarrow \mathbb{R}$  be defined as  $f(x) = x - 1$  and  $g : \mathbb{R} - \{1, -1\} \rightarrow \mathbb{R}$  be defined as

$$g(x) = \frac{x^2}{x^2 - 1}.$$

Question: Then the function  $f \circ g$  is :

- A one-one but not onto  
 B onto but not one-one  
 C both one-one and onto  
 D neither one-one nor onto

Q:2

Topic Name:Mathematics-Section A

ItemCode:182

If the system of equations

$$\alpha x + y + z = 5, x + 2y + 3z = 4, x + 3y + 5z = \beta$$

Question: has infinitely many solutions, then the ordered pair  $(\alpha, \beta)$  is equal to :

- A  $(1, -3)$   
 B  $(-1, 3)$   
 C  $(1, 3)$   
 D  $(-1, -3)$

Q:3

Topic Name:Mathematics-Section A

ItemCode:183

If  $A = \sum_{n=1}^{\infty} \frac{1}{(3+(-1)^n)^n}$  and  $B = \sum_{n=1}^{\infty} \frac{(-1)^n}{(3+(-1)^n)^n}$  then  $\frac{A}{B}$  is equal to :

- A  $\frac{11}{9}$   
 B 1  
 C  $-\frac{11}{9}$   
 D  $-\frac{11}{3}$

Q:4

Topic Name:Mathematics-Section A

ItemCode:184

Question:  $\lim_{x \rightarrow 0} \frac{\cos(\sin x) - \cos x}{x^4}$  is equal to :

- A  $\frac{1}{3}$   
 B  $\frac{1}{4}$   
 C  $\frac{1}{6}$   
 D  $\frac{1}{12}$

Q:5

Topic Name:Mathematics-Section A

ItemCode:185

Let  $f(x) = \min \{1, 1 + x \sin x\}$ ,  $0 \leq x \leq 2\pi$ . If  $m$  is the number of points, where  $f$  is not differentiable and  $n$  is the number of points, where  $f$  is not continuous, then the

Question: ordered pair  $(m, n)$  is equal to

- A (2, 0)
- B (1, 0)
- C (1, 1)
- D (2, 1)

Q:6

Topic Name:Mathematics-Section A

ItemCode:186

Consider a cuboid of sides  $2x$ ,  $4x$  and  $5x$  and a closed hemisphere of radius  $r$ . If the sum of their surface areas is a constant  $k$ , then the ratio  $x : r$ , for which the sum of

Question: their volumes is maximum, is :

- A 2:5
- B 19:45
- C 3:8
- D 19:15

Q:7

Topic Name:Mathematics-Section A

ItemCode:187

Question: The area of the region bounded by  $y^2 = 8x$  and  $y^2 = 16(3 - x)$  is equal to:

- A  $\frac{32}{3}$
- B  $\frac{40}{3}$
- C 16
- D 19

Q:8

Topic Name:Mathematics-Section A

ItemCode:188

Question: If  $\int \frac{1}{x} \sqrt{\frac{1-x}{1+x}} dx = g(x) + c$ ,  $g(1) = 0$ , then  $g\left(\frac{1}{2}\right)$  is equal to :

- A  $\log_e \left( \frac{\sqrt{3}-1}{\sqrt{3}+1} \right) + \frac{\pi}{3}$
- B  $\log_e \left( \frac{\sqrt{3}+1}{\sqrt{3}-1} \right) + \frac{\pi}{3}$
- C  $\log_e \left( \frac{\sqrt{3}+1}{\sqrt{3}-1} \right) - \frac{\pi}{3}$
- D  $\frac{1}{2} \log_e \left( \frac{\sqrt{3}-1}{\sqrt{3}+1} \right) - \frac{\pi}{6}$

Q:9

Topic Name:Mathematics-Section A

ItemCode:189

If  $y = y(x)$  is the solution of the differential equation  $x \frac{dy}{dx} + 2y = x e^x$ ,  $y(1) = 0$

Question: then the local maximum value of the function  $z(x) = x^2 y(x) - e^x$ ,  $x \in \mathbb{R}$  is :

- A  $1 - e$
- B 0
- C  $\frac{1}{2}$
- D  $\frac{4}{e} - e$

Q:10

Topic Name:Mathematics-Section A

ItemCode:1810

If the solution of the differential equation

$\frac{dy}{dx} + e^x(x^2 - 2)y = (x^2 - 2x)(x^2 - 2)e^{2x}$  satisfies  $y(0) = 0$ , then the value of  $y(2)$

Question: is \_\_\_\_\_

- A -1
- B 1
- C 0
- D  $e$

Q:11

Topic Name:Mathematics-Section A

ItemCode:1811

If  $m$  is the slope of a common tangent to the curves  $\frac{x^2}{16} + \frac{y^2}{9} = 1$  and

Question:  $x^2 + y^2 = 12$ , then  $12 m^2$  is equal to :

- A 6
- B 9
- C 10
- D 12

Q:12

Topic Name:Mathematics-Section A

ItemCode:1812

The locus of the mid point of the line segment joining the point (4, 3) and the

Question: points on the ellipse  $x^2 + 2y^2 = 4$  is an ellipse with eccentricity :

- A  $\frac{\sqrt{3}}{2}$
- B  $\frac{1}{2\sqrt{2}}$
- C  $\frac{1}{\sqrt{2}}$
- D  $\frac{1}{2}$

Q:13

Topic Name:Mathematics-Section A

ItemCode:1813

The normal to the hyperbola  $\frac{x^2}{a^2} - \frac{y^2}{9} = 1$  at the point  $(8, 3\sqrt{3})$  on it passes through

Question: the point :

A  $(15, -2\sqrt{3})$

B  $(9, 2\sqrt{3})$

C  $(-1, 9\sqrt{3})$

D  $(-1, 6\sqrt{3})$

Q:14

Topic Name: Mathematics-Section A

ItemCode: 1814

If the plane  $2x + y - 5z = 0$  is rotated about its line of intersection with the plane  $3x - y + 4z - 7 = 0$  by an angle of  $\frac{\pi}{2}$ , then the plane after the rotation passes

Question: through the point :

A  $(2, -2, 0)$

B  $(-2, 2, 0)$

C  $(1, 0, 2)$

D  $(-1, 0, -2)$

Q:15

Topic Name: Mathematics-Section A

ItemCode: 1815

If the lines  $\vec{r} = (\hat{i} - \hat{j} + \hat{k}) + \lambda(3\hat{j} - \hat{k})$  and  $\vec{r} = (\alpha\hat{i} - \hat{j}) + \mu(2\hat{i} - 3\hat{k})$  are coplanar, then the distance of the plane containing these two lines from the

Question: point  $(\alpha, 0, 0)$  is:

A  $\frac{2}{9}$

B  $\frac{2}{11}$

C  $\frac{4}{11}$

D 2

Q:16

Topic Name: Mathematics-Section A

ItemCode: 1816

Let  $\vec{a} = \hat{i} + \hat{j} + 2\hat{k}$ ,  $\vec{b} = 2\hat{i} - 3\hat{j} + \hat{k}$  and  $\vec{c} = \hat{i} - \hat{j} + \hat{k}$  be three given vectors. Let  $\vec{v}$

be a vector in the plane of  $\vec{a}$  and  $\vec{b}$  whose projection on  $\vec{c}$  is  $\frac{2}{\sqrt{5}}$ . If

$\vec{v} \cdot \hat{j} = 7$ , then  $\vec{v} \cdot (\hat{i} + \hat{k})$  is equal to :

Question:

A 6

B 7

C 8

D 9

Q:17

Topic Name: Mathematics-Section A

ItemCode: 1817

The mean and standard deviation of 50 observations are 15 and 2 respectively. It was found that one incorrect observation was taken such that the sum of correct and incorrect observations is 70. If the correct mean is 16, then the correct variance

Question: is equal to :

- A 10
- B 36
- C 43
- D 60

Q:18

Topic Name: Mathematics-Section A

ItemCode: 1818

Question:  $16 \sin(20^\circ) \sin(40^\circ) \sin(80^\circ)$  is equal to :

- A  $\sqrt{3}$
- B  $2\sqrt{3}$
- C 3
- D  $4\sqrt{3}$

Q:19

Topic Name: Mathematics-Section A

ItemCode: 1819

If the inverse trigonometric functions take principal values, then

Question:  $\cos^{-1}\left(\frac{3}{10} \cos\left(\tan^{-1}\left(\frac{4}{3}\right)\right) + \frac{2}{5} \sin\left(\tan^{-1}\left(\frac{4}{3}\right)\right)\right)$  is equal to :

- A 0
- B  $\frac{\pi}{4}$
- C  $\frac{\pi}{3}$
- D  $\frac{\pi}{6}$

Q:20

Topic Name: Mathematics-Section A

ItemCode: 1820

Let  $r \in \{p, q, \sim p, \sim q\}$  be such that the logical statement

Question:  $r \vee (\sim p) \Rightarrow (p \wedge q) \vee r$  is a tautology. Then  $r$  is equal to :

- A  $p$
- B  $q$
- C  $\sim p$
- D  $\sim q$

Q:21

Topic Name: Mathematics-Section B

ItemCode: 1821

Let  $f: \mathbb{R} \rightarrow \mathbb{R}$  satisfy  $f(x+y) = 2^x f(y) + 4^y f(x), \forall x, y \in \mathbb{R}$ . If  $f(2) = 3$ , then

Question:  $14 \cdot \frac{f'(4)}{f'(2)}$  is equal to \_\_\_\_\_.

Q:22

Topic Name: Mathematics-Section B

ItemCode: 1822

Let  $p$  and  $q$  be two real numbers such that  $p + q = 3$  and  $p^4 + q^4 = 369$ . Then

Question:  $\left(\frac{1}{p} + \frac{1}{q}\right)^{-2}$  is equal to \_\_\_\_\_.

Q:23

Topic Name: Mathematics-Section B

ItemCode:1823

If  $z^2 + z + 1 = 0$ ,  $z \in \mathbb{C}$ , then  $\left| \sum_{n=1}^{15} \left( z^n + (-1)^n \frac{1}{z^n} \right)^2 \right|$  is equal to \_\_\_\_\_.

Question:

Q:24

Topic Name:Mathematics-Section B

ItemCode:1824

Let  $X = \begin{bmatrix} 0 & 1 & 0 \\ 0 & 0 & 1 \\ 0 & 0 & 0 \end{bmatrix}$ ,  $Y = \alpha I + \beta X + \gamma X^2$  and

$Z = \alpha^2 I - \alpha \beta X + (\beta^2 - \alpha \gamma) X^2$ ,  $\alpha, \beta, \gamma \in \mathbb{R}$ . If  $Y^{-1} = \begin{bmatrix} 1/5 & -2/5 & 1/5 \\ 0 & 1/5 & -2/5 \\ 0 & 0 & 1/5 \end{bmatrix}$ , then

Question:  $(\alpha - \beta + \gamma)^2$  is equal to \_\_\_\_\_.

Q:25

Topic Name:Mathematics-Section B

ItemCode:1825

The total number of 3-digit numbers, whose greatest common divisor with 36 is 2,

Question: is \_\_\_\_\_.

Q:26

Topic Name:Mathematics-Section B

ItemCode:1826

If  $\binom{40}{C_0} + \binom{41}{C_1} + \binom{42}{C_2} + \dots + \binom{60}{C_{20}} = \frac{m}{n} {}^{60}C_{20}$   $m$  and  $n$  are coprime, then

Question:  $m + n$  is equal to \_\_\_\_\_.

Q:27

Topic Name:Mathematics-Section B

ItemCode:1827

If  $a_1 (> 0)$ ,  $a_2, a_3, a_4, a_5$  are in a G.P.,  $a_2 + a_3 = 2a_4 + 1$  and  $3a_2 + a_3 = 2a_4$ , then

Question:  $a_2 + a_4 + 2a_5$  is equal to \_\_\_\_\_.

Q:28

Topic Name:Mathematics-Section B

ItemCode:1828

The integral  $\frac{24}{\pi} \int_0^{\sqrt{2}} \frac{(2-x^2) dx}{(2+x^2) \sqrt{4+x^4}}$  is equal to \_\_\_\_\_.

Question:

Q:29

Topic Name:Mathematics-Section B

ItemCode:1829

Let a line  $L_1$  be tangent to the hyperbola  $\frac{x^2}{16} - \frac{y^2}{4} = 1$  and let  $L_2$  be the line passing through the origin and perpendicular to  $L_1$ . If the locus of the point of

Question: intersection of  $L_1$  and  $L_2$  is  $(x^2 + y^2)^2 = \alpha x^2 + \beta y^2$ , then  $\alpha + \beta$  is equal to \_\_\_\_\_.

Q:30

Topic Name:Mathematics-Section B

ItemCode:1830

If the probability that a randomly chosen 6-digit number formed by using digits 1

Question: and 8 only is a multiple of 21 is  $p$ , then  $96p$  is equal to \_\_\_\_\_.

Q:31

Topic Name:Physics-Section A

ItemCode:1831

Question: The dimension of mutual inductance is :

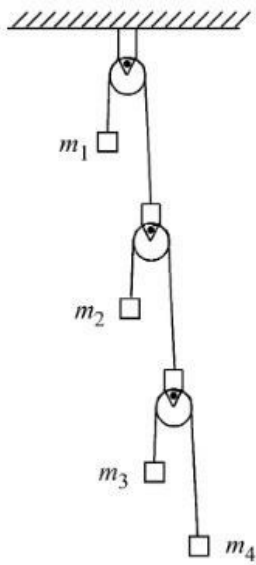
- A  $[ML^2 T^{-2} A^{-1}]$
- B  $[ML^2 T^{-3} A^{-1}]$
- C  $[ML^2 T^{-2} A^{-2}]$
- D  $[ML^2 T^{-3} A^{-2}]$

Q:32

Topic Name: Physics-Section A

ItemCode:1832

In the arrangement shown in figure  $a_1, a_2, a_3$  and  $a_4$  are the accelerations of masses  $m_1, m_2, m_3$  and  $m_4$  respectively. Which of the following relation is true for this arrangement ?



Question:

- A  $4a_1 + 2a_2 + a_3 + a_4 = 0$
- B  $a_1 + 4a_2 + 3a_3 + a_4 = 0$
- C  $a_1 + 4a_2 + 3a_3 + 2a_4 = 0$
- D  $2a_1 + 2a_2 + 3a_3 + a_4 = 0$

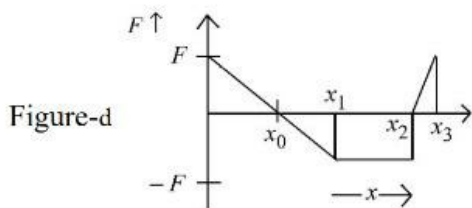
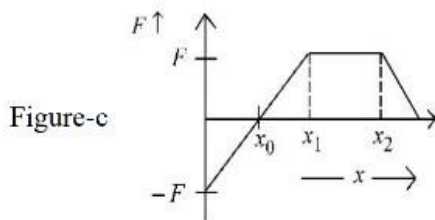
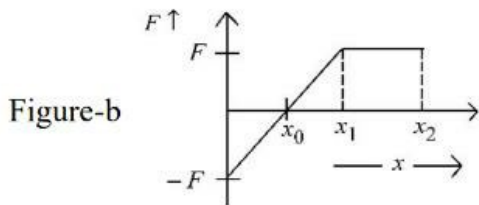
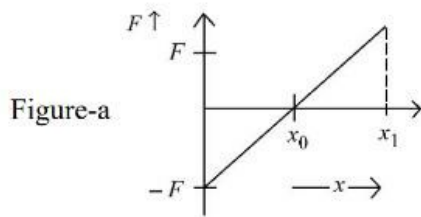
Q:33

Topic Name: Physics-Section A

downloaded from  
StudentSuvidha.com

ItemCode:1833

Arrange the four graphs in descending order of total work done; where  $W_1, W_2, W_3$  and  $W_4$  are the work done corresponding to figure a, b, c and d respectively.



Question:

- A  $W_3 > W_2 > W_1 > W_4$
- B  $W_3 > W_2 > W_4 > W_1$
- C  $W_2 > W_3 > W_4 > W_1$
- D  $W_2 > W_3 > W_1 > W_4$

downloaded from  
StudentSuvidha.com

Q:34

Topic Name:Physics-Section A

ItemCode:1834

A solid spherical ball is rolling on a frictionless horizontal plane surface about its axis of symmetry. The ratio of rotational kinetic energy of the ball to its total

Question: kinetic energy is -

- A  $\frac{2}{5}$
- B  $\frac{2}{7}$
- C  $\frac{1}{5}$
- D  $\frac{7}{10}$

Q:35

Topic Name:Physics-Section A



ItemCode:1835

Given below are two statements: One is labelled as Assertion A and the other is labelled as Reason R.

Assertion A: If we move from poles to equator, the direction of acceleration due to gravity of earth always points towards the center of earth without any variation in its magnitude.

Reason R: At equator, the direction of acceleration due to the gravity is towards the center of earth.

In the light of above statements, choose the correct answer from the options given

Question: below

- A Both A and R are true and R is the correct explanation of A.
- B Both A and R are true but R is NOT the correct explanation of A.
- C A is true but R is false
- D A is false but R is true

Q:36

Topic Name:Physics-Section A

ItemCode:1836

If  $p$  is the density and  $\eta$  is coefficient of viscosity of fluid which flows with a

Question: speed  $v$  in the pipe of diameter  $d$ , the correct formula for Reynolds number  $R_e$  is :

- A  $R_e = \frac{\eta d}{\rho v}$
- B  $R_e = \frac{\rho v}{\eta d}$
- C  $R_e = \frac{\rho v d}{\eta}$
- D  $R_e = \frac{\eta}{\rho v d}$

Q:37

Topic Name:Physics-Section A

ItemCode:1837

A flask contains argon and oxygen in the ratio of 3:2 in mass and the mixture is kept at  $27^\circ\text{C}$ . The ratio of their average kinetic energy per molecule respectively

Question: will be :

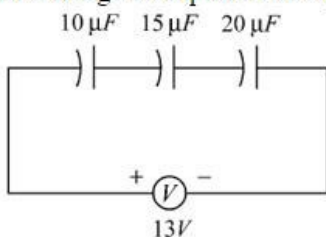
- A 3:2
- B 9:4
- C 2:3
- D 1:1

Q:38

Topic Name:Physics-Section A

ItemCode:1838

The charge on capacitor of capacitance  $15\mu\text{F}$  in the figure given below is :



Question:

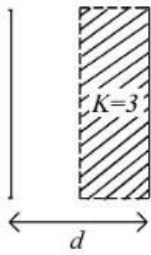
- A  $60\mu\text{c}$
- B  $130\mu\text{c}$
- C  $260\mu\text{c}$
- D  $585\mu\text{c}$

Q:39

Topic Name:Physics-Section A

ItemCode:1839

A parallel plate capacitor with plate area  $A$  and plate separation  $d=2$  m has a capacitance of  $4 \mu F$ . The new capacitance of the system if half of the space between them is filled with a dielectric material of dielectric constant  $K=3$  (as shown in figure) will be :



Question:

- A  $2 \mu F$
- B  $32 \mu F$
- C  $6 \mu F$
- D  $8 \mu F$

Q:40

Topic Name:Physics-Section A

ItemCode:1840

Sixty four conducting drops each of radius  $0.02$  m and each carrying a charge of  $5 \mu C$  are combined to form a bigger drop. The ratio of surface density of bigger

Question: drop to the smaller drop will be :

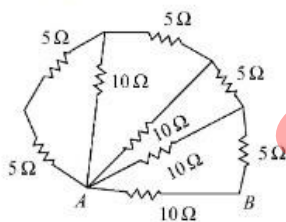
- A 1:4
- B 4:1
- C 1:8
- D 8:1

Q:41

Topic Name:Physics-Section A

ItemCode:1841

The equivalent resistance between points A and B in the given network is :



Question:

- A  $65 \Omega$
- B  $20 \Omega$
- C  $5 \Omega$
- D  $2 \Omega$

Q:42

Topic Name:Physics-Section A

ItemCode:1842

A bar magnet having a magnetic moment of  $2.0 \times 10^5 \text{ JT}^{-1}$ , is placed along the direction of uniform magnetic field of magnitude  $B=14 \times 10^{-5} \text{ T}$ . The work done

Question: in rotating the magnet slowly through  $60^\circ$  from the direction of field is :

- A 14 J
- B 8.4 J

C 4 J

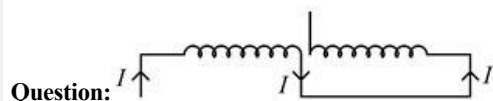
D 1.4 J

Q:43

Topic Name:Physics-Section A

ItemCode:1843

Two coils of self inductance  $L_1$  and  $L_2$  are connected in series combination having mutual inductance of the coils as  $M$ . The equivalent self inductance of the combination will be :



A  $\frac{1}{L_1} + \frac{1}{L_2} + \frac{1}{M}$

B  $L_1 + L_2 + M$

C  $L_1 + L_2 + 2M$

D  $L_1 + L_2 - 2M$

Q:44

Topic Name:Physics-Section A

ItemCode:1844

A metallic conductor of length 1m rotates in a vertical plane parallel to east-west direction about one of its end with angular velocity  $5 \text{ rad s}^{-1}$ . If the horizontal component of earth's magnetic field is  $0.2 \times 10^{-4} \text{ T}$ , then emf induced between

Question: the two ends of the conductor is :

A  $5\mu\text{V}$

B  $50\mu\text{V}$

C  $5\text{mV}$

D  $50\text{mV}$

Q:45

Topic Name:Physics-Section A

ItemCode:1845

Question: Which is the correct ascending order of wavelengths ?

A  $\lambda_{\text{visible}} < \lambda_{\text{X-ray}} < \lambda_{\text{gamma-ray}} < \lambda_{\text{microwave}}$

B  $\lambda_{\text{gamma-ray}} < \lambda_{\text{X-ray}} < \lambda_{\text{visible}} < \lambda_{\text{microwave}}$

C  $\lambda_{\text{X-ray}} < \lambda_{\text{gamma-ray}} < \lambda_{\text{visible}} < \lambda_{\text{microwave}}$

D  $\lambda_{\text{microwave}} < \lambda_{\text{visible}} < \lambda_{\text{gamma-ray}} < \lambda_{\text{X-ray}}$

Q:46

Topic Name:Physics-Section A

ItemCode:1846

For a specific wavelength 670 nm of light coming from a galaxy moving with velocity  $v$ , the observed wavelength is 670.7 nm.

Question: The value of  $v$  is :

A  $3 \times 10^8 \text{ ms}^{-1}$

B  $3 \times 10^{10} \text{ ms}^{-1}$

C  $3.13 \times 10^5 \text{ ms}^{-1}$

D  $4.48 \times 10^5 \text{ ms}^{-1}$

Q:47

Topic Name:Physics-Section A

ItemCode:1847

A metal surface is illuminated by a radiation of wavelength  $4500 \text{ \AA}$ . The ejected photo-electron enters a constant magnetic field of  $2 \text{ mT}$  making an angle of  $90^\circ$  with the magnetic field. If it starts revolving in a circular path of radius  $2 \text{ mm}$ , the work function of the metal is approximately :

Question:

- A  $1.36 \text{ eV}$
- B  $1.69 \text{ eV}$
- C  $2.78 \text{ eV}$
- D  $2.23 \text{ eV}$

Q:48

Topic Name:Physics-Section A

ItemCode:1848

A radioactive nucleus can decay by two different processes. Half-life for the first process is  $3.0 \text{ hours}$  while it is  $4.5 \text{ hours}$  for the second process. The effective half-

Question: life of the nucleus will be :

- A  $3.75 \text{ hours}$
- B  $0.56 \text{ hours}$
- C  $0.26 \text{ hours}$
- D  $1.80 \text{ hours}$

Q:49

Topic Name:Physics-Section A

ItemCode:1849

The positive feedback is required by an amplifier to act an oscillator. The feedback

Question: here means :

- A External input is necessary to sustain ac signal in output.
- B A portion of the output power is returned back to the input.
- C Feedback can be achieved by LR network.
- D The base-collector junction must be forward biased.

Q:50

Topic Name:Physics-Section A

ItemCode:1850

A sinusoidal wave  $y(t) = 40\sin(10 \times 10^6 \pi t)$  is amplitude modulated by another sinusoidal wave  $x(t) = 20\sin(1000\pi t)$ . The amplitude of minimum frequency

Question: component of modulated signal is :

- A  $0.5$
- B  $0.25$
- C  $20$
- D  $10$

Q:51

Topic Name:Physics-Section B

ItemCode:1851

A ball is projected vertically upward with an initial velocity of  $50 \text{ ms}^{-1}$  at  $t = 0 \text{ s}$ . At  $t = 2 \text{ s}$ , another ball is projected vertically upward with same velocity. At  $t = \underline{\hspace{2cm}}$  s, second ball will meet the first ball ( $g = 10 \text{ ms}^{-2}$ ).

Question:

Q:52

Topic Name:Physics-Section B

ItemCode:1852

A batsman hits back a ball of mass 0.4 kg straight in the direction of the bowler without changing its initial speed of  $15 \text{ ms}^{-1}$ . The impulse imparted to the ball is

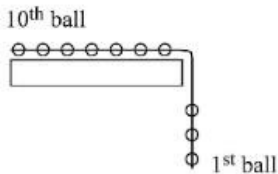
Question: \_\_\_\_\_ Ns.

Q:53

Topic Name:Physics-Section B

ItemCode:1853

A system of 10 balls each of mass 2 kg are connected via massless and unstretchable string. The system is allowed to slip over the edge of a smooth table as shown in figure. Tension on the string between the 7<sup>th</sup> and 8<sup>th</sup> ball is \_\_\_\_\_ N when 6<sup>th</sup> ball just leaves the table.



Question:

Q:54

Topic Name:Physics-Section B

ItemCode:1854

A geyser heats water flowing at a rate of 2.0 kg per minute from  $30^\circ\text{C}$  to  $70^\circ\text{C}$ . If geyser operates on a gas burner, the rate of combustion of fuel will be

\_\_\_\_\_  $\text{g min}^{-1}$

[Heat of combustion =  $8 \times 10^3 \text{ Jg}^{-1}$ ,

Question: Specific heat of water =  $4.2 \text{ Jg}^{-1} \text{ }^\circ\text{C}^{-1}$ ]

Q:55

Topic Name:Physics-Section B

ItemCode:1855

A heat engine operates with the cold reservoir at temperature 324 K. The minimum temperature of the hot reservoir, if the heat engine takes 300 J heat from the hot reservoir and delivers 180 J heat to the cold reservoir per cycle, is

Question: \_\_\_\_\_ K.

Q:56

Topic Name:Physics-Section B

ItemCode:1856

A set of 20 tuning forks is arranged in a series of increasing frequencies. If each fork gives 4 beats with respect to the preceding fork and the frequency of the last fork is twice the frequency of the first, then the frequency of last fork is \_\_\_\_\_

Question: Hz.

Q:57

Topic Name:Physics-Section B

ItemCode:1857

Two 10 cm long, straight wires, each carrying a current of 5A are kept parallel to each other. If each wire experienced a force of  $10^{-5} \text{ N}$ , then separation between

Question: the wires is \_\_\_\_\_ cm.

Q:58

Topic Name:Physics-Section B

ItemCode:1858

A small bulb is placed at the bottom of a tank containing water to a depth of  $\sqrt{7} \text{ m}$ .

The refractive index of water is  $\frac{4}{3}$ . The area of the surface of water through which

Question: light from the bulb can emerge out is  $x\pi \text{ m}^2$ . The value of  $x$  is \_\_\_\_\_.

Q:59

Topic Name:Physics-Section B

ItemCode:1859

A travelling microscope is used to determine the refractive index of a glass slab. If 40 divisions are there in 1 cm on main scale and 50 Vernier scale divisions are equal to 49 main scale divisions, then least count of the travelling microscope is

Question: \_\_\_\_\_  $\times 10^{-6} m$ .

Q:60

Topic Name:Physics-Section B

ItemCode:1860

The stopping potential for photoelectrons emitted from a surface illuminated by light of wavelength 6630 Å is 0.42 V. If the threshold frequency is  $x \times 10^{13} /s$ , where  $x$  is \_\_\_\_\_ (nearest integer).

Question: (Given, speed light =  $3 \times 10^8$  m/s ,Planck's constant =  $6.63 \times 10^{-34} Js$ )

Q:61

Topic Name:Chemistry-Section A

ItemCode:1861

Question: The number of radial and angular nodes in 4d orbital are, respectively

A 1 and 2

B 3 and 2

C 1 and 0

D 2 and 1

Q:62

Topic Name:Chemistry-Section A

ItemCode:1862

Match List I with List II.

List I Enzyme	List II Conversion of
A. Invertase	I. Starch into maltose
B. Zymase	II. Maltose into glucose
C. Diastase	III. Glucose into ethanol
D. Maltase	IV. Cane sugar into glucose

Question: Choose the most appropriate answer from the options given below:

A A-III, B-IV, C-II, D-I

B A-III, B-II, C-I, D-IV

C A-IV, B-III, C-I, D-II

D A-IV, B-II, C-III, D-I

Q:63

Topic Name:Chemistry-Section A

ItemCode:1863

Question: Which of the following elements is considered as a metalloid?

A Sc

B Pb

C Bi

D Te

Q:64

Topic Name:Chemistry-Section A

ItemCode:1864

Question: The role of depressants in 'Froth Floation method' is to

- A selectively prevent one component of the ore from coming to the froth.
- B reduce the consumption of oil for froth formation.
- C stabilize the froth.
- D enhance non-wettability of the mineral particles.

Q:65

Topic Name: Chemistry-Section A

ItemCode:1865

Boiling of hard water is helpful in removing the temporary hardness by converting

Question: calcium hydrogen carbonate and magnesium hydrogen carbonate to

- A  $\text{CaCO}_3$  and  $\text{Mg(OH)}_2$
- B  $\text{CaCO}_3$  and  $\text{MgCO}_3$
- C  $\text{Ca(OH)}_2$  and  $\text{MgCO}_3$
- D  $\text{Ca(OH)}_2$  and  $\text{Mg(OH)}_2$

Q:66

Topic Name: Chemistry-Section A

ItemCode:1866

Question: s-block element which **cannot** be qualitatively confirmed by the flame test is

- A Li
- B Na
- C Rb
- D Be

Q:67

Topic Name: Chemistry-Section A

ItemCode:1867

Question: The oxide which contains an odd electron at the nitrogen atom is

- A  $\text{N}_2\text{O}$
- B  $\text{NO}_2$
- C  $\text{N}_2\text{O}_3$
- D  $\text{N}_2\text{O}_5$

Q:68

Topic Name: Chemistry-Section A

ItemCode:1868

Question: Which one of the following is an example of disproportionation reaction ?

- A  $3\text{MnO}_4^{2-} + 4\text{H}^+ \rightarrow 2\text{MnO}_4^- + \text{MnO}_2 + 2\text{H}_2\text{O}$
- B  $\text{MnO}_4^- + 4\text{H}^+ + 4e^- \rightarrow \text{MnO}_2 + 2\text{H}_2\text{O}$
- C  $10\text{I}^- + 2\text{MnO}_4^- + 16\text{H}^+ \rightarrow 2\text{Mn}^{2+} + 8\text{H}_2\text{O} + 5\text{I}_2$
- D  $8\text{MnO}_4^- + 3\text{S}_2\text{O}_3^{2-} + \text{H}_2\text{O} \rightarrow 8\text{MnO}_2 + 6\text{SO}_4^{2-} + 2\text{OH}^-$

Q:69

Topic Name: Chemistry-Section A

ItemCode:1869

The most common oxidation state of Lanthanoid elements is +3. Which of the

Question: following is likely to deviate easily from +3 oxidation state?

- A Ce (At. No. 58)

- B La (At. No. 57)
- C Lu (At. No. 71)
- D Gd (At. No. 64)

Q:70

Topic Name: Chemistry-Section A

ItemCode: 1870

The measured BOD values for four different water samples (A-D) are as follows:

A = 3 ppm; B = 18 ppm; C = 21 ppm; D = 4 ppm. The water samples which can be

Question: called as highly polluted with organic wastes, are

- A A and B
- B A and D
- C B and C
- D B and D

Q:71

Topic Name: Chemistry-Section A

ItemCode: 1871

Question: The correct order of nucleophilicity is

- A  $F^- > OH^-$
- B  $H_2\ddot{O} > OH^-$
- C  $R\ddot{O}H > RO^-$
- D  $NH_2^- > NH_3$

Q:72

Topic Name: Chemistry-Section A

ItemCode: 1872

Oxidation of toluene to benzaldehyde can be easily carried out with which of the

Question: following reagents?

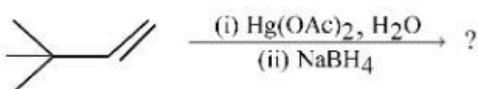
- A  $CrO_3$ /acetic acid,  $H_3O^+$
- B  $CrO_3$ /acetic anhydride,  $H_3O^+$
- C  $KMnO_4/HCl$ ,  $H_3O^+$
- D  $CO/HCl$ , anhydrous  $AlCl_3$

Q:73

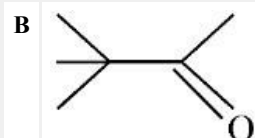
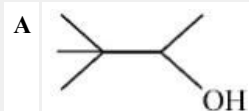
Topic Name: Chemistry-Section A

ItemCode: 1873

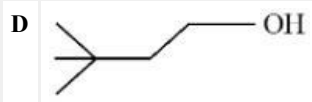
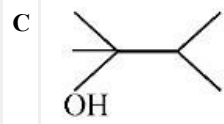
The major product in the following reaction



Question: is

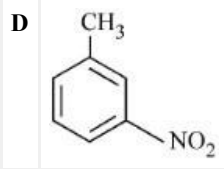
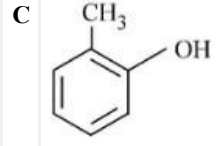
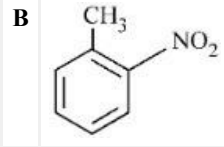
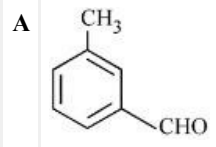






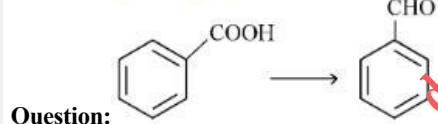
Q:74  
Topic Name: Chemistry-Section A

ItemCode: 1874  
Halogenation of which one of the following will yield m-substituted product with respect to methyl group as a major product?



Q:75  
Topic Name: Chemistry-Section A

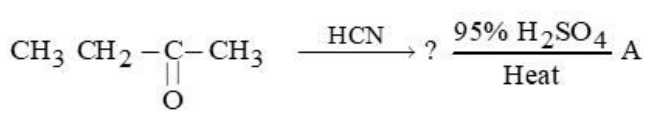
ItemCode: 1875  
The reagent, from the following, which converts benzoic acid to benzaldehyde in one step is



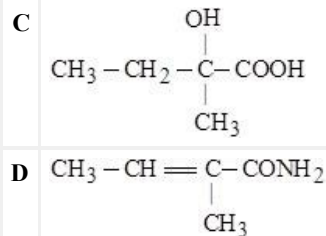
- A  $\text{LiAlH}_4$
- B  $\text{KMnO}_4$
- C  $\text{MnO}$
- D  $\text{NaBH}_4$

Q:76  
Topic Name: Chemistry-Section A

ItemCode: 1876  
The final product 'A' in the following reaction sequence



- Question: is
- A  $\text{CH}_3\text{CH}=\overset{\text{CH}_3}{\text{C}}\text{COOH}$
  - B  $\text{CH}_3\text{CH}=\overset{\text{H}}{\text{C}}\text{CN}$



Q:77

Topic Name: Chemistry-Section A

ItemCode: 1877

Question: Which statement is NOT correct for p-toluenesulphonyl chloride?

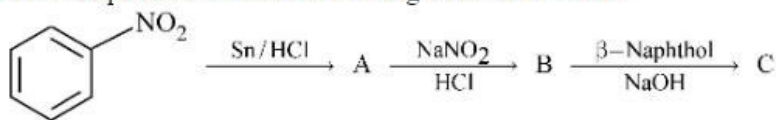
- A It is known as Hinsberg's reagent.
- B It is used to distinguish primary and secondary amines.
- C On treatment with secondary amine, it leads to a product, that is soluble in alkali.
- D It doesn't react with tertiary amines.

Q:78

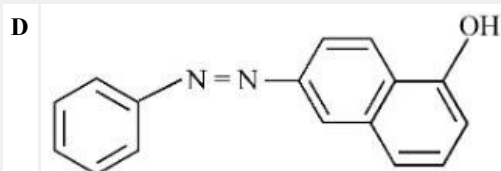
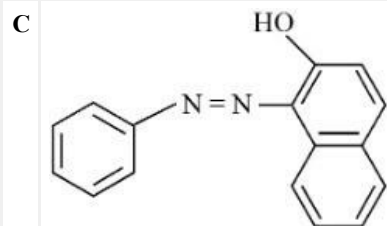
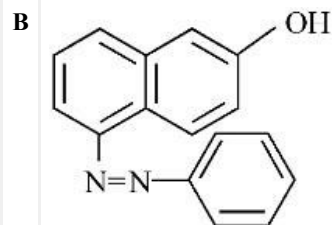
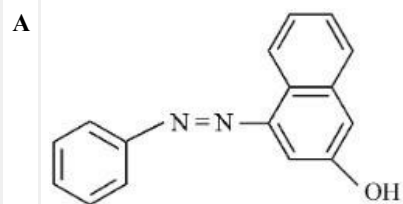
Topic Name: Chemistry-Section A

ItemCode: 1878

The final product 'C' in the following series of reactions



Question: is

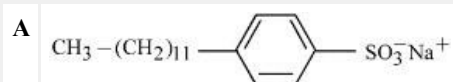


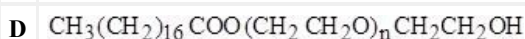
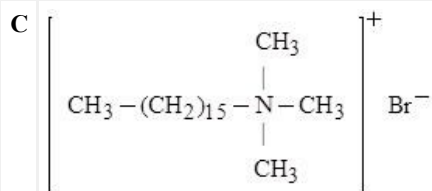
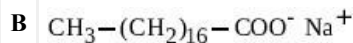
Q:79

Topic Name: Chemistry-Section A

ItemCode: 1879

Question: Which of the following is NOT an example of synthetic detergent?





Q:80

Topic Name:Chemistry-Section A

ItemCode:1880

Question: Which one of the following is a water soluble vitamin, that is not excreted easily?

A Vitamin B<sub>2</sub>

B Vitamin B<sub>1</sub>

C Vitamin B<sub>6</sub>

D Vitamin B<sub>12</sub>

Q:81

Topic Name:Chemistry-Section B

ItemCode:1881

CNG is an important transportation fuel. When 100 g CNG is mixed with 208 g oxygen in vehicles, it leads to the formation of CO<sub>2</sub> and H<sub>2</sub>O and produces large quantity of heat during this combustion, then the amount of carbon dioxide, produced in grams is \_\_\_\_\_. [nearest integer]

Question: [Assume CNG to be methane]

Q:82

Topic Name:Chemistry-Section B

ItemCode:1882

In a solid AB, A atoms are in ccp arrangement and B atoms occupy all the octahedral sites. If two atoms from the opposite faces are removed, then the resultant stoichiometry of the compound is A<sub>x</sub>B<sub>y</sub>. The value of x is \_\_\_\_\_. [nearest integer]

Question: integer]

Q:83

Topic Name:Chemistry-Section B

ItemCode:1883

Amongst SF<sub>4</sub>, XeF<sub>4</sub>, CF<sub>4</sub> and H<sub>2</sub>O, the number of species with two lone pairs of

Question: electrons is \_\_\_\_\_.

Q:84

Topic Name:Chemistry-Section B

ItemCode:1884

A fish swimming in water body when taken out from the water body is covered with a film of water of weight 36 g. When it is subjected to cooking at 100 °C, then the internal energy for vaporization in kJ mol<sup>-1</sup> is \_\_\_\_\_. [nearest integer]

[Assume steam to be an ideal gas. Given  $\Delta_{\text{vap}}H^\ominus$  for water at 373 K and 1 bar is

Question: 41.1 kJ mol<sup>-1</sup> ; R = 8.31 J K<sup>-1</sup>mol<sup>-1</sup>]

Q:85

Topic Name:Chemistry-Section B

ItemCode:1885

The osmotic pressure exerted by a solution prepared by dissolving 2.0 g of protein of molar mass  $60 \text{ kg mol}^{-1}$  in 200 mL of water at  $27^\circ\text{C}$  is \_\_\_\_\_ Pa.[integer value]

Question: (use  $R = 0.083 \text{ L bar mol}^{-1} \text{ K}^{-1}$ )

Q:86

Topic Name:Chemistry-Section B

ItemCode:1886

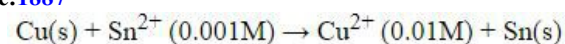
40% of HI undergoes decomposition to  $\text{H}_2$  and  $\text{I}_2$  at 300 K.  $\Delta G^\ominus$  for this decomposition reaction at one atmosphere pressure is \_\_\_\_\_  $\text{J mol}^{-1}$ . [nearest integer]

Question: (Use  $R = 8.31 \text{ J K}^{-1} \text{ mol}^{-1}$ ;  $\log 2 = 0.3010$ ,  $\ln 10 = 2.3$ ,  $\log 3 = 0.477$ )

Q:87

Topic Name:Chemistry-Section B

ItemCode:1887



The Gibbs free energy change for the above reaction at 298 K is  $x \times 10^{-1} \text{ kJ mol}^{-1}$ . The value of  $x$  is \_\_\_\_\_. [nearest integer]

Question: [Given:  $E^\ominus_{\text{Cu}^{2+}/\text{Cu}} = 0.34\text{V}$ ;  $E^\ominus_{\text{Sn}^{2+}/\text{Sn}} = -0.14\text{V}$ ;  $F = 96500 \text{ C mol}^{-1}$ ]

Q:88

Topic Name:Chemistry-Section B

ItemCode:1888

Catalyst A reduces the activation energy for a reaction by  $10 \text{ kJ mol}^{-1}$  at 300 K.

The ratio of rate constants,  $\frac{k_{\text{T, Catalysed}}}{k_{\text{T, Uncatalysed}}}$  is  $e^x$ . The value of  $x$  is \_\_\_\_\_. [nearest integer]

[Assume that the pre-exponential factor is same in both the cases.]

Question: Given  $R = 8.31 \text{ J K}^{-1} \text{ mol}^{-1}$

Q:89

Topic Name:Chemistry-Section B

ItemCode:1889

Reaction of  $[\text{Co}(\text{H}_2\text{O})_6]^{2+}$  with excess ammonia and in the presence of oxygen results into a diamagnetic product. Number of electrons present in  $t_{2g}$ -orbitals of

Question: the product is \_\_\_\_\_.

Q:90

Topic Name:Chemistry-Section B

ItemCode:1890

The moles of methane required to produce 81 g of water after complete

Question: combustion is \_\_\_\_\_  $\times 10^{-2} \text{ mol}$ . [nearest integer]